



# Shapes Game


square



octagon




pentagon




rectangle




triangle



circle



hexagon

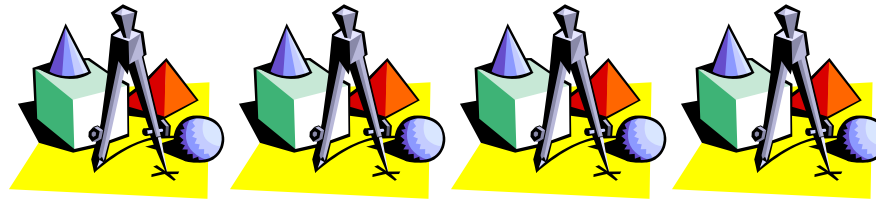


diamond



# Shapes Game

|   |  |   |  |
|---|--|---|--|
| <p>A shape where all four sides are equal length.</p> | <p>A shape having eight angles and eight sides.</p>                              | <p>A shape that has five angles and five sides.</p> | <p>A shape that has two longer parallel lines on one side and there are four right angles.</p> |
| <p>A shape having three sides and three angles.</p>   | <p>A shape that is a curved line that forms a closed path and has NO angles.</p> | <p>A shape having six angles and six sides.</p>     | <p>A shape with four equal sides forming two obtuse angles and two acute angles.</p>           |



# Shapes Game

## Directions:

1. Cut the descriptions of the shapes up into cards.
2. Match the description card with the shape.